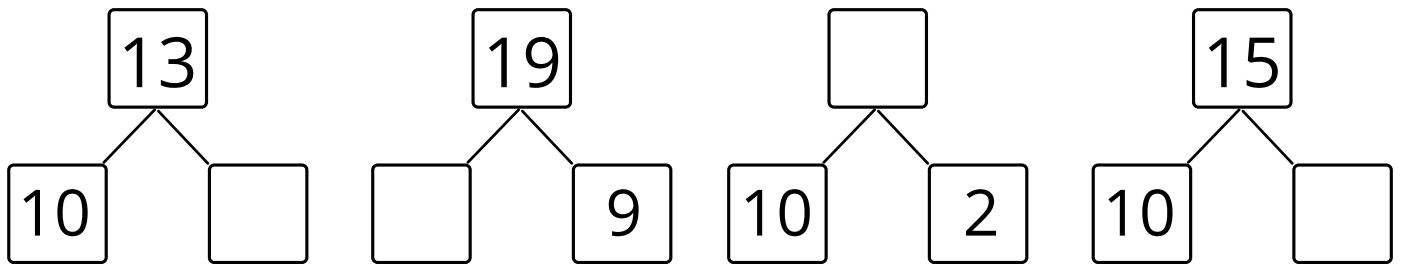


Aprílové opakovanie s Mickeym

1. Doplň rozklady.



2. Vypočítaj.

$10 + 8 = \underline{\quad}$

$12 + 3 = \underline{\quad}$

$16 + 1 = \underline{\quad}$

$14 + 5 = \underline{\quad}$

$15 - 10 = \underline{\quad}$

$13 - 1 = \underline{\quad}$

3. Porovnaj. Použi znamienka $>$, $<$, $=$.

$5 \square 9$


$18 \square 14$

$13 \square 3$

$11 \square 0$


$10 \square 20$

$12 \square 13$




4. Zapiš počet, dokresli a vyrieš.

KATKA MALA



DOSTALA



TERAZ MÁ



	+		=	
--	---	--	---	--